






Year 2 Homework  
20.11.20

How much money is in the piggy bank?  
Count in 2s, 5s or 10s to find the answer.



**Challenge:**

Can you write a multiplication sum for each one?